





Use the array provided to solve each problem.


1) $26 \times 20 =$




2) $20 \times 22 =$




3) $20 \times 29 =$




4) $20 \times 27 =$



5) $25 \times 20 =$



6) $20 \times 28 =$



Answers

1. _____

2. _____

3. _____

4. _____

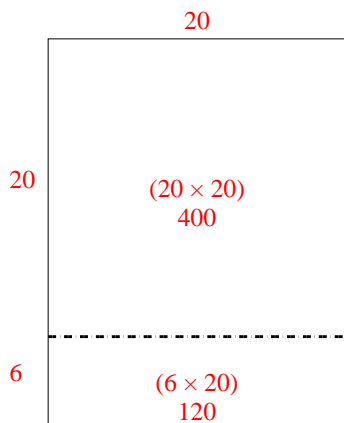
5. _____

6. _____

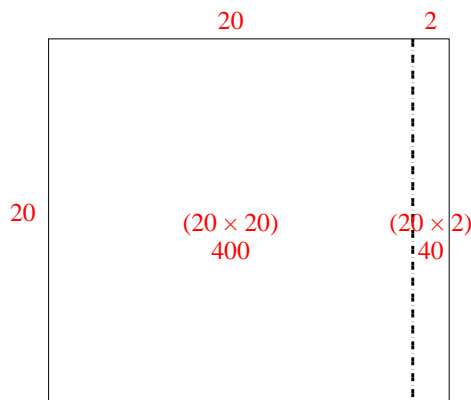


Use the array provided to solve each problem.

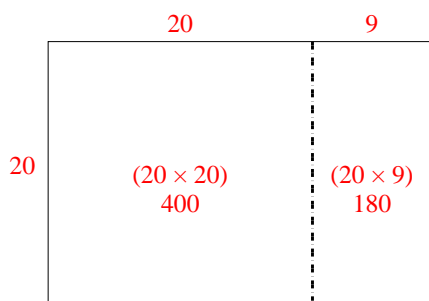
1) $26 \times 20 =$



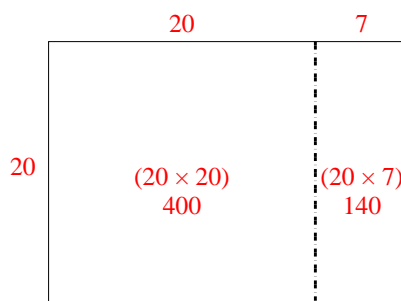
2) $20 \times 22 =$



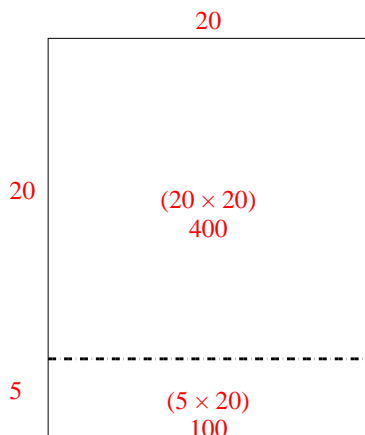
3) $20 \times 29 =$



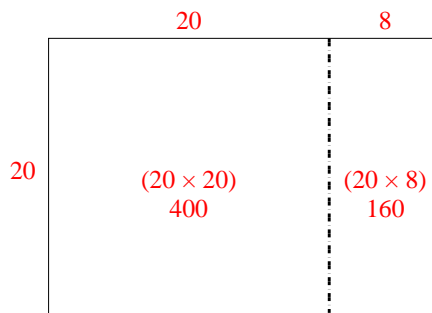
4) $20 \times 27 =$



5) $25 \times 20 =$



6) $20 \times 28 =$



Answers

1. **520**

2. **440**

3. **580**

4. **540**

5. **500**

6. **560**